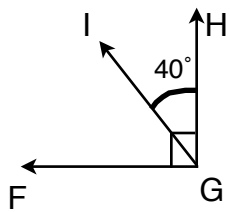
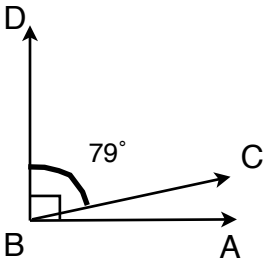
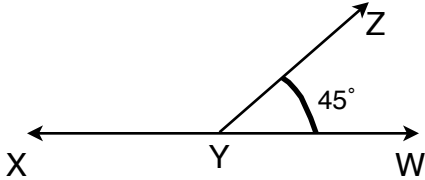
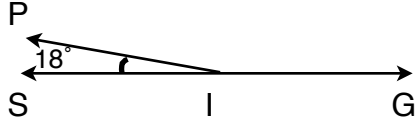
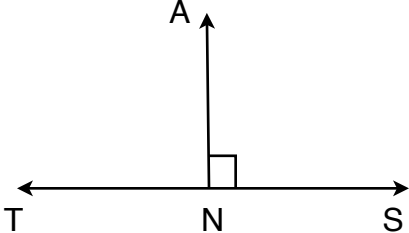
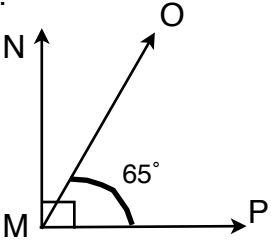
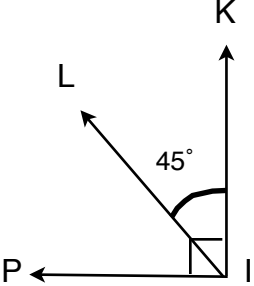
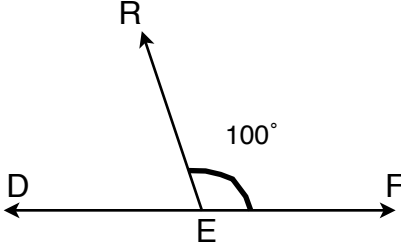
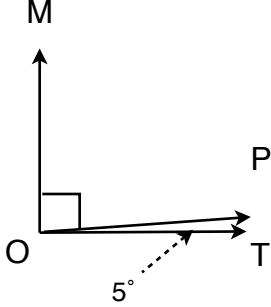


Measure the Angles

Directions: Find the measurement of each unknown complimentary and supplementary angle.

<p>What is the measurement of \angle IGF?</p>  <p>_____°</p>	<p>What is the measurement of \angle ABC?</p>  <p>_____°</p>	<p>What is the measurement of \angle XYZ?</p>  <p>_____°</p>
<p>What is the measurement of \angle PIG?</p>  <p>_____°</p>	<p>What is the measurement of \angle ANT?</p>  <p>_____°</p>	<p>What is the measurement of \angle NMO?</p>  <p>_____°</p>
<p>What is the measurement of \angle LIP?</p>  <p>_____°</p>	<p>What is the measurement of \angle RED?</p>  <p>_____°</p>	<p>What is the measurement of \angle MOP?</p>  <p>_____°</p>